

JUNIOR MUSEUM CLUB JEWRY WALL MUSEUM.

UNIT II IRON AGE AND ROMAN PERIODS.

Find the Iron Age Family

At about what date did these people live?

What is the boy holding?

What is the girl holding?

The woman is wearing in her hair.

What do mother and father wear round their neck?

What sort of shoes do they wear?

NOW COLOUR THE PICTURE BELOW CAREFULLY.



Iron Age Family

Look in the case opposite

What were coins made of at this time?

What were the Iron Age combs made of?


Find the Iron Age chariot

For what purpose were chariots like this used?

Why are there two men in the chariot?

What are the chariot sides made of?

NOW COLOUR THE PICTURE ON THE NEXT PAGE.



Iron Age Chariot.

The Roman Conquest (look at the pictures on the wall)

At what date did the Romans first invade Britain?

Who began the conquest of Britain in A.D.43?

What was a Roman centurion's badge of rank?

The Romans Brought the Benefits of Civilisation.

Romans usually wrote with aOn

The Romans also wrote with scratching on pottery and tiles. Look at the labels and then say:

What is written on the red tile?

What is written on the big box (or flue) tile?

Where do you find this sign?

.....

Draw the decoration round it.

With what did the Romans fill their lamps?

.....

Find the Roman needles. What are they made of?



Roman Civilisation.

Find the Roman babies' feeding bottles.

They are made of
and

Draw one.

What are the spoons made of?.....

Look at the kitchen knife and the skewer. What has happened to the knife that hasn't happened to the skewer? Why?

Roman Military Engineers.

Roman roads were very straight. How did the road builders keep their roads straight as they cut through tall forests?

Look at the map of Leicestershire on the wall. Find Leicester. What was its Roman name?

How many Roman villas are shown on the map?

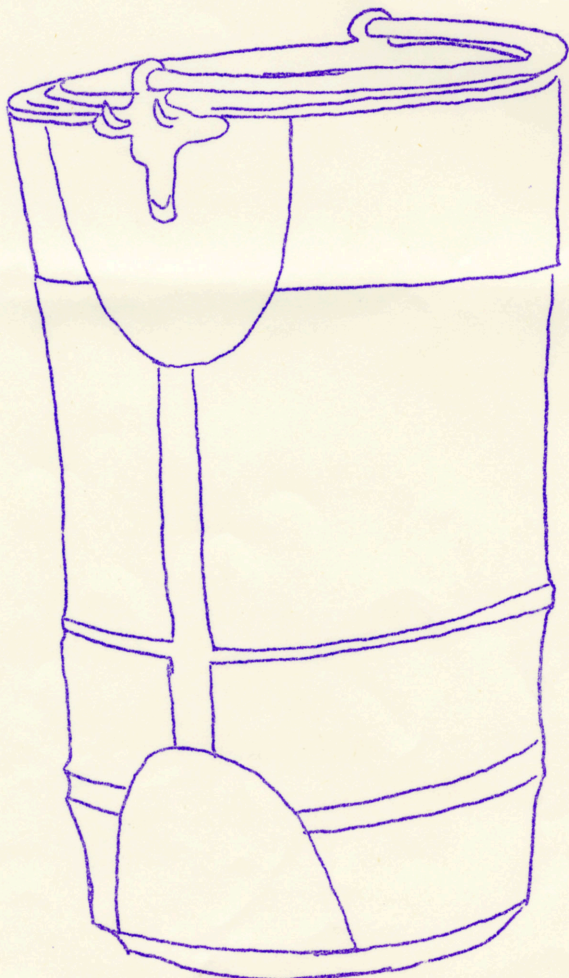
Now find Leicester on the map of Roman Britain.
Can you see the Fosse Way?

Roman Bucket.

Where was it found?

It belongs to the
century


When was it found?



Roman Art

Find the frog necklace and draw it.

What is this?



COLOUR IT.


What Roman emperor is named on the big milestone?

How far from Leicester did it stand?

In what village was it found?

It was nearly used as a

Trade and Building



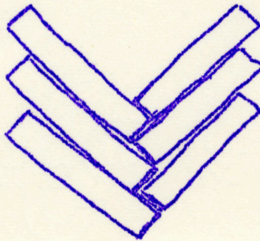
What is this?

.....


Colour it.

What is it made of?

.....




A
brick floor.



What is this?

.....

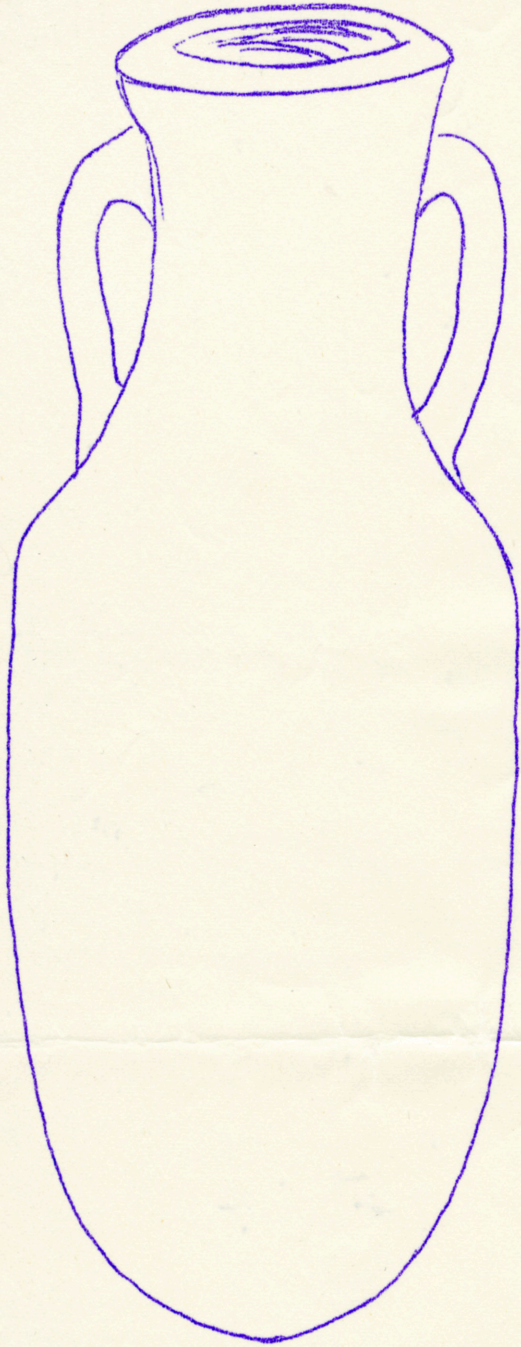
Colour it.



Where do you find this?

Draw the next part of
the pattern in the empty
square.

Trade and Building




What is this called?

.....

What was kept in it?


Colour this one.

Don't forget to draw in
the cracks.

Draw the pattern on the flue tile 2 or 4 above. 

Where did the slates of the roof come from?

Make a coloured picture of the green or yellow facing marble.



The Cyparrisus Pavement.
3rd. Century A.D.

Colour this piece of Roman pavement by looking at the pavement in the museum and using rather brighter colours.

What is the picture about?

Find the fragments of coloured glass and draw and colour them carefully.

IF YOU HAVE FINISHED PLEASE DRAW SOME MORE ROMAN THINGS ON THE BACKS OF THE SHEETS. IF NOT, COME ANOTHER DAY AND FINISH IT OFF.